

10<sup>th</sup> CLASS MARCH – 2020

SOCIAL STUDIES – II

Time : 2.45 Hours]


[Max. Marks : 50

Section-I

Instructions: 1. Write answers to ALL questions.

2. Each question carries ½ mark

1. Identify the person, who has the relation with 20<sup>th</sup> century.



12 x ½ = 6 M

2. The Bolsheviks party was led by \_\_\_\_\_?

Find odd one out?

3. Sun yet- sen, Chiang Kaishek, Mao Zedong, Ngo Dinh Diem

4. Observe the picture and answer the question.

Q) 1945, Royal Indian Army crossing the river. What is the name of the river.



5. How many women members are there in constituent assembly?

6. In 1971 general elections, what is the popular slogan of Indira Gandhi?

7. Mandal commission recommended \_\_\_\_\_ reservation to OBC.

8. Arrange the countries from North to South

Zimbabwe, Egypt, Nigeria, South Africa

9. Find out the wrongly matched pair.

- 1) Meira Paibi Movement – Manipur
- 2) Anti arrack movement – Andhra Pradesh
- 3) Civil Rights Movement – America

10. Right to information act was made in \_\_\_\_\_ year.

11. Who is the present Chief Justice of India?

12. Name the party which has the symbol.



### Section-II

**Instructions: 1. Write answers to ALL questions.**

**2. Each question carries 1 mark**

13. Who was the Architect of League of Nations?

14. Observe the picture and answer the question.

Q) Name the persons in picture.

15. What does the poster says?

16. Expand NWFP.

17. Who is the President of the Constituent Assembly?

18. On which river was the Bhakra Nangal Dam constructed?



19. Find odd one out.  
China, France, Britain, Russia, USA, Japan
20. What does Lok Adalat mean?

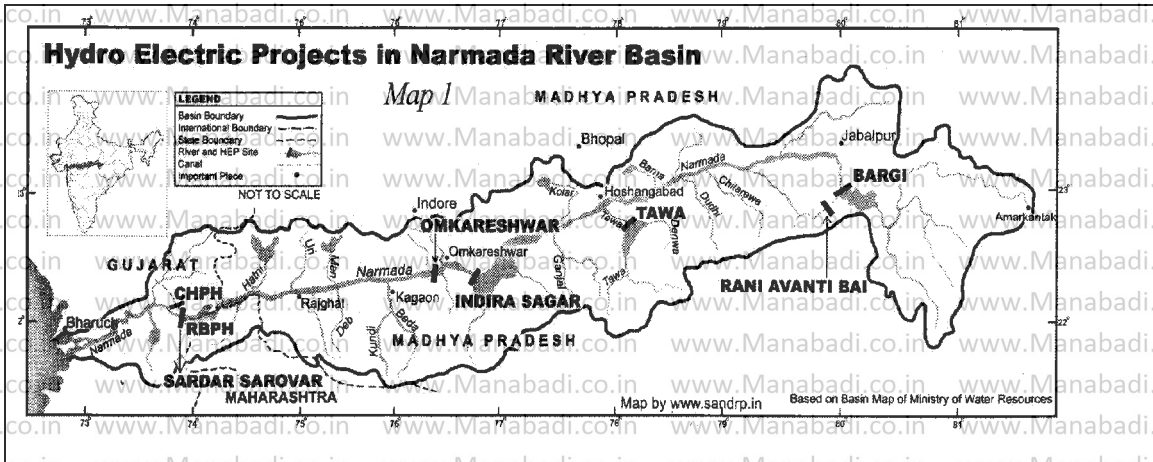
**Section-III**

**Instructions: 1. Write answers to ALL questions.**

**2. Each question carries 2 mark**

21. Who are eligible for free legal services?
22. Mention any four principles of Panchsheel?

**8 x 2 = 16 M**



23. a) In which state is Indira Sagar located?  
b) What is the special of Amarkantak with regard to river Narmada?

24. Explain the organs of the UNO?

25. Observe the following graph and answer the given questions.

**The Armaments Race**

- a) How much was the military expenditure of great powers in 1914?
- b) How much times the military expenditure increased from 1880 to 1914?



26. How were the super powers benefited by military alliances?

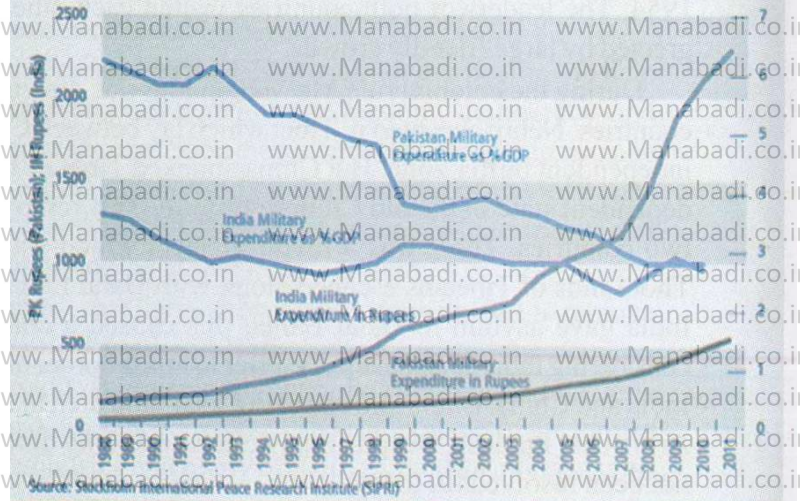
27.

Graph : India's and Pakistan's military expenditures?

a) Which country had spent more on military expenditure in its GDP?

b) What does the graph show?

Graph 2 India's and Pakistan's Military Expenditures



28. Why didn't Gandhiji celebrate the first Independence Day?

**Section-IV**

**Instructions 1. Write answers to ALL the questions**

**5 x 4 = 20 M**

**2. Answers any one from internal choice of each question**

**3. Each question carries 4 marks**

29. a) What are the causes that lead to the two world wars?

(or)

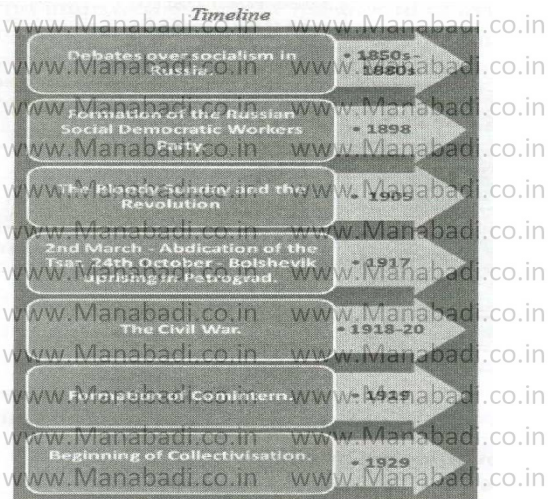
b) Observe the timeline chart and answer the following questions.

a) When and how were the foundations for socialism laid?

b) How many revolutions took place in Russia?

c) Did the peace establish in Russia after 1917?

d) What do you mean by collectivization.



30. a) Read the following paragraph and answer the questions that follow.

This phase of struggle with the US was brutal. Thousands of US troops arrived equipped with heavy weapons and tanks and backed by the most powerful bombers of the time – B52s. The wide spread attacks and use of chemical weapons – Napalm (a deadly bomb which caused intense damage to humans), Agent Orange (which destroyed plants and trees and made the land barren for a long time) and phosphorous bombs – destroyed many villages and decimated jungles. Civilians died in large numbers.

a) Which struggle was brutal?

b) What were B52's?

c) What was 'Napalm'?

d) Which was used on forest areas?

(OR)

b) Write a short note on various reasons for the partition of India.

31.

a) Write a short note on basic principles of Indian constitution?

(OR)

b) In what ways was the emergency period a set back to the Indian democracy?

32.

a) Write briefly about the present relations between India and Pakistan?

(OR)

b) 'Coalition Governments in due political Instability – Elucidate?'

33.

**Point out the following in the outline of world**

a) The mother land of Mao-Zedong

b) Bolshevik revolution took place in this country

c) This country was affected by atom bombs in 1945

d) The French settlers in this country are called colons

(OR)

a) The first summit of NAM was held in this country.

b) S.Allende belonged to this country.

c) U.S.A tested nuclear weapons under waters here

d) The headquarters of UNO