

10th CLASS MARCH – 2020
SOCIAL STUDIES PAPER – I

Time : 2.45 Hours]

[Max. Marks : 50

Instructions: 1. Part A must be answered in separate answer sheet.
2. Map and part – B should tag to the answer sheet.

Section-I

Instructions: 1. Write answers to ALL questions.
2. Each question carries ½ mark

12 x ½ = 6 M

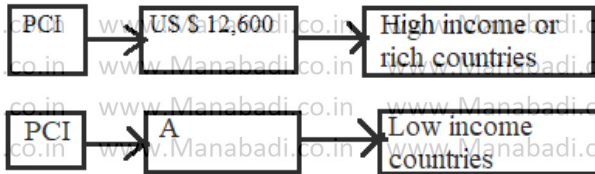
1. A list of activities is given below. Identify the economic activity and write it in your answer book.

1. Soundarya cooks food for her family
2. Soundarya farms vegetables for her own
3. Soundarya farms vegetables and sells in the market
4. Soundarya looks after her family

2. Complete the second relation based on the first

Outer Himalayas : Shivaliks :: Lesser Himalayas : ?

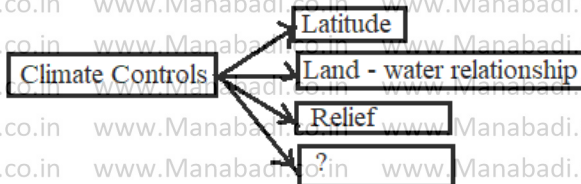
3. Complete the box marked by 'A'



4. Find the odd one out

Postman, Cobbler, Soldier, Police constable

5. Find the missing one



6. Read the following statements and mark if it is an example of weather or climate

"During the last few decades drought in vidarbha region has increased"

7. The Mahanadi rises near _____ in chattisgarh (Panchmarhi/sihawa)

8. What is population density?

9. Find the valley in the picture which is in Ladakh



10. Which of the following could be considered as seasonal migration?

A) Women moving from their Parent's house to husband's house due to marriage

B) Turmeric harvesters moving from one district to another district in Tamilnadu for 3 months in a year.

11. Name the countries related to this picture



12. Name the institutions, which are referred as world Bank?

Section – II

Instructions 1. Write answers to ALL the questions

8 x 1 = 8 M

2. Each question carries 1 Mark

13. Which incident does this picture show?




14. Factors of Production

- Land
- Labour
- Capital
- ?

Fill the fourth box.

15. What does "Stunting" refer to ?

16. Write a caption for this picture in the context of environment



17. Name four villages that will be submerged by Sardar Sarovar Dam?

18.



Based on the relation in the first pair, complete the second pair

19. The skilled migrants among the following are _____

- A) Doctors B) IT Professionals C) A & B D) None of these

20. Identify the false statement from the following and correct it

- A) Census data is collected every 10 years
B) Sex Ratio refers to the number of females in adult population

Section-III

Instructions 1. Write answers to ALL the questions

8 x 2 = 16 M

2. Each question carries 2 marks

21. Write a note on the inequality in Indian based on the graphs given below



22. Describe the relation between increase in food production and food security?

23. How do governments try to attract more foreign investment?

24. Fill in the following table

Labour in production process	Give three different examples of production activity for each
Where owner / family also provides the labour required	a)
Where owners hire labourers to do the work	b)

25. The following are migrants of different types. Classify them into internal and international migrants

- a) People going from India to Saudi Arabia to work as technicians
b) Agricultural labourers going from Bihar to Punjab
c) Brick workers going from Odisha to Andhra Pradesh
d) Teachers coming from china to India to teach Chinese to Indian children

26. Who is literate person according to the Census of 2011?

27. What were the four bandis of Hiware Bazar?

28. Are Shimla and Delhi located on very different latitudes? Is Shimla cooler than Delhi during summer?

Section-IV

Instructions 1. Write answers to ALL the questions

5 x 4 = 20 M

2. Answers any one from internal choice of each question

3. Each question carries 4 marks

29. A) Describe any four major relief divisions of Indian land mass?

(OR)

B) What kind of places are attracted as settlements? Explain?

30. A) Observe the table and answer the following questions.

Distribution of workers in India, 2009 – 10(%)

Sector	Place of Residence		Sex		All workers
	Rural	Urban	Male	Female	
Agriculture	68	8	47	69	53
Industry	17	34	34	16	22
Service	15	58	19	15	25
Total	100	100	100	100	100

- (a) What does this table tell us?
- (b) In which sector the female workers are more?
- (c) Which sector is prosperous in rural areas?
- (d) Why is agriculture sector very low in urban areas?

(OR)

B) Observe the following table and answer the following questions

- a) what is HDI and what is the Rank of Nepal?
- b) what is the average years of schooling in India and Bangladesh?
- c) Among the countries given in the table which country's HDI Rank is more?
- d) Name the countries which have the same life expectancy at birth?

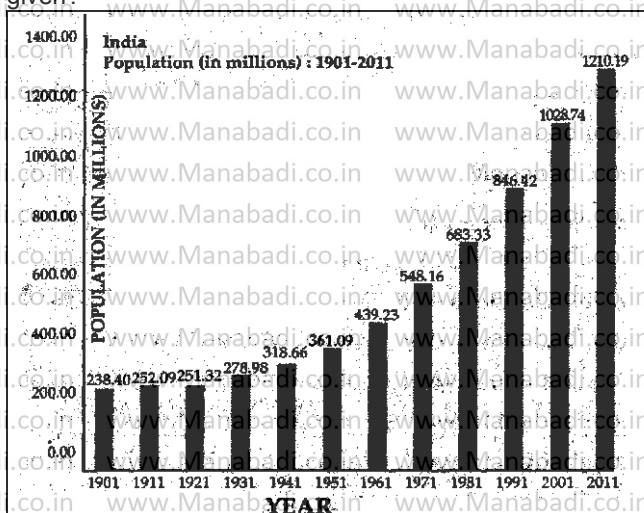
Country	Per Capita Income \$	Life expectancy at birth (Years)	Average years of schooling	Expected years of schooling	Human Development Index world
Sri Lanka	5170	75.1	9.3	12.7	92
India	3285	65.3	6.0	7.7	130
Pakistan	2566	65.7	4.9	7.3	146
Myanmar	1817	65.7	3.9	9.4	149
Bangladesh	1785	69.2	6.0	8.1	170
Nepal	1137	69.1	3.2	8.9	157

31. In India many MNCs were benefited by Globalisation. But small producers faced so many problems. Give your suggestions for a fair Globalisation?

(OR)

Find about the various ways in which the problems of garbage and emissions are being dealt with around the world?


32. A) Observe the increment in population of India and its growth – 1901 – 2011 and answer the questions given?



- a) In which year did the population decrease?
- b) From which year onwards is the population continuously increasing?
- c) what could be the reasons for the speed with which increases took place after Indian independence?
- d) What is the population growth rate for the decade 2001 – 2011?

(OR)

B) Here are two posters from other countries can you guess the message given in the them? Have you seen similar posters in India? Discuss?



33. Point out the following in the given outline of India

- A) 1) This river originates near Amarkantak
- 2) The State where "Schooling Revolution" took place
- 3) The lake at the borders of A.P and Tamilnadu
- 4) Aravind Kezriwal is the Chief Minister of this state

(OR)

- B) 1) K_2 is located in this range of Greater Himalayas.
- 2) Kaleswaram project is located in this state
- 3) This plateau is very rich in mineral wealth
- 4) The mountain range on the north of river Narmada